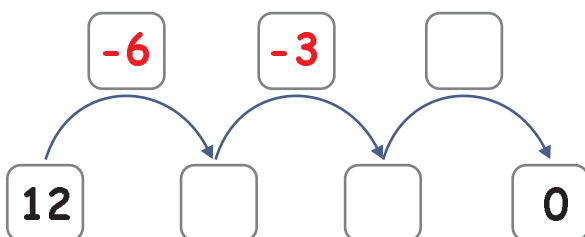
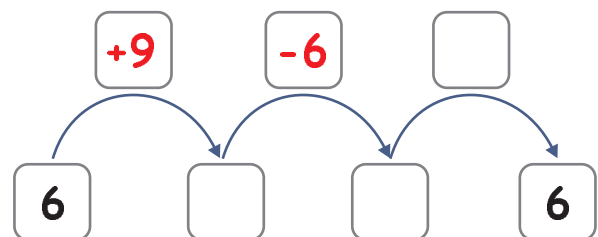
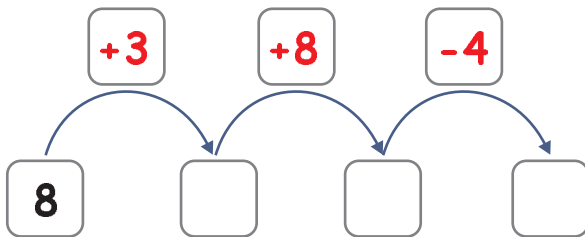
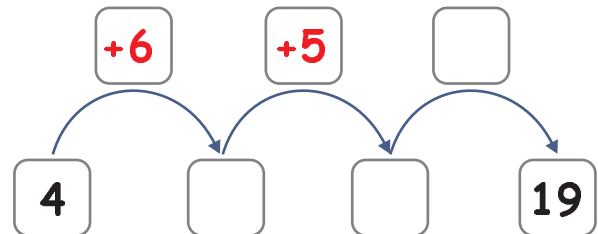
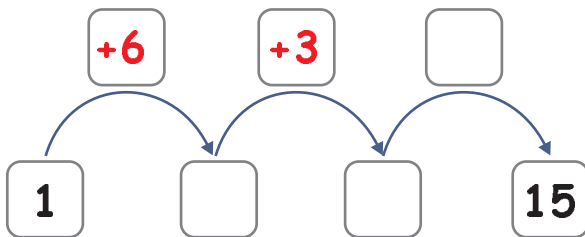
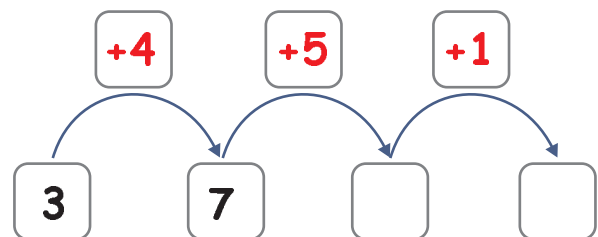
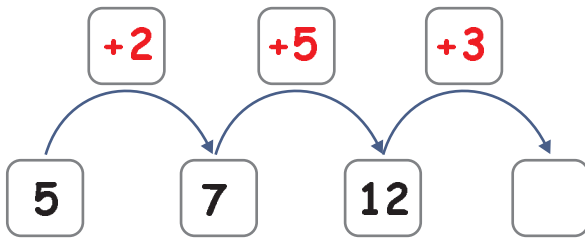



Addition und Subtraktion ZR 20


Berechne und setze die fehlenden Zahlen ein!



Addition und Subtraktion ZR 20



Berechne und setze die fehlenden Zahlen ein!



Addition und Subtraktion ZR 20

Berechne und setze die fehlenden Zahlen ein!



$$\boxed{3} \xrightarrow{+7} \boxed{} \xrightarrow{+5} \boxed{} \xrightarrow{-6} \boxed{}$$

$$\boxed{5} \xrightarrow{+6} \boxed{} \xrightarrow{-2} \boxed{} \xrightarrow{+9} \boxed{}$$

$$\boxed{9} \xrightarrow{+5} \boxed{} \xrightarrow{+6} \boxed{} \xrightarrow{-5} \boxed{}$$

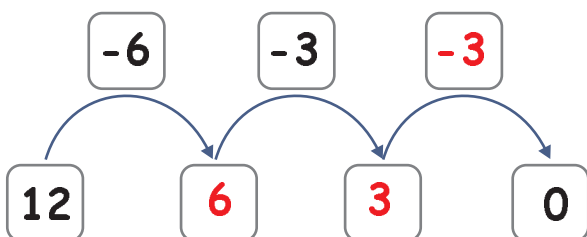
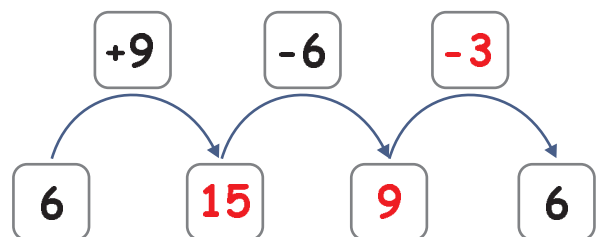
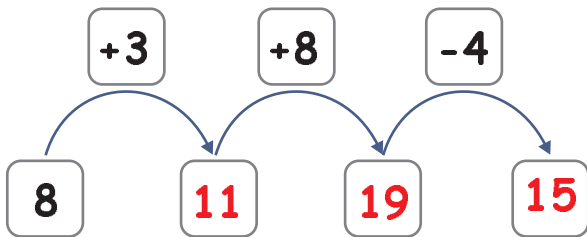
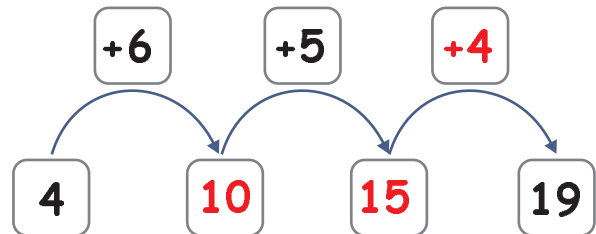
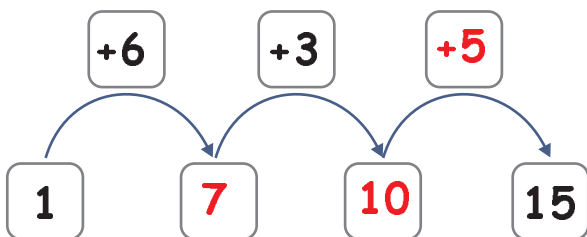
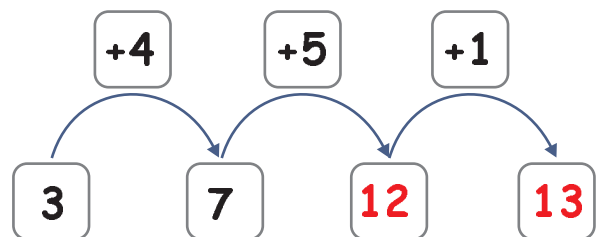
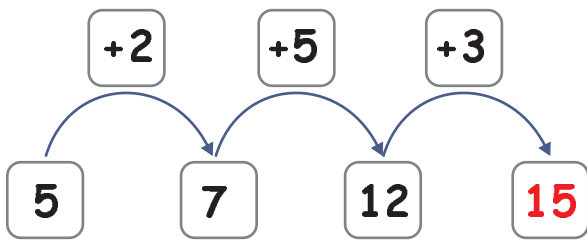
$$\boxed{10} \xrightarrow{-7} \boxed{} \xrightarrow{+12} \boxed{} \xrightarrow{+2} \boxed{}$$

$$\boxed{4} \xrightarrow{+11} \boxed{} \xrightarrow{+3} \boxed{} \xrightarrow{-9} \boxed{}$$


$$\boxed{7} \xrightarrow{+7} \boxed{} \xrightarrow{+6} \boxed{} \xrightarrow{-10} \boxed{}$$

Addition und Subtraktion ZR 20

Berechne und setze die fehlenden Zahlen ein!



Addition und Subtraktion ZR 20



Berechne und setze die fehlenden Zahlen ein!



Addition und Subtraktion ZR 20



Berechne und setze die fehlenden Zahlen ein!

